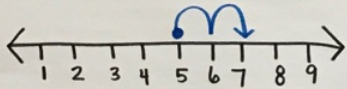



-19

Number Line



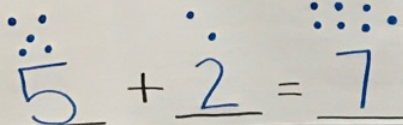
$$\underline{5} + \underline{2} = \underline{7}$$

Put BIG numbers in mind... then count on



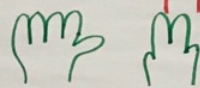
$$\underline{5} + \underline{2} = \underline{7}$$

Draw Dots



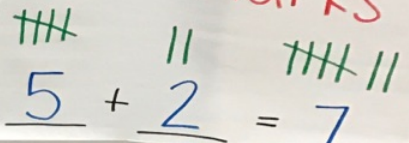
$$\underline{5} + \underline{2} = \underline{7}$$

Use your fingers



$$\underline{5} + \underline{2} = \underline{7}$$

Use tally marks



$$\underline{5} + \underline{2} = \underline{7}$$

Use counters. Unifix cubes, or other objects



$$\underline{5} + \underline{2} = \underline{7}$$

Tens Frame



$$\underline{5} + \underline{2} = \underline{7}$$